


Elmwood Normal School

City Walk

October 2019



Room _____

Christchurch Bus Interchange - look up, look down and look straight ahead.

1. Find a map on the wall. What 3 buses will get you to and from Merivale?



2. Which 4 birds do you think are on the columns? Tick your choices.



kiwi



weka



tui



kererū




kākā



kākāpō

3. Take a photo of the stars on the ceiling. Draw two stars.



4. What important letter is missing from this picture of the compass outside the bus interchange? Write it on the picture. Can you add S, W and E to the compass?



5. What is missing from the street sign? Follow the sign that says POLICE.



Stop when you find this insect.



6. What other living things can you see in the painting?

7. Draw what 33 Lichfield St is used for. Why would this be important to the city?


8. How many flags are on display today? _____

Which ones do you see?

New Zealand Police



New Zealand




Great Britain



St John Ambulance




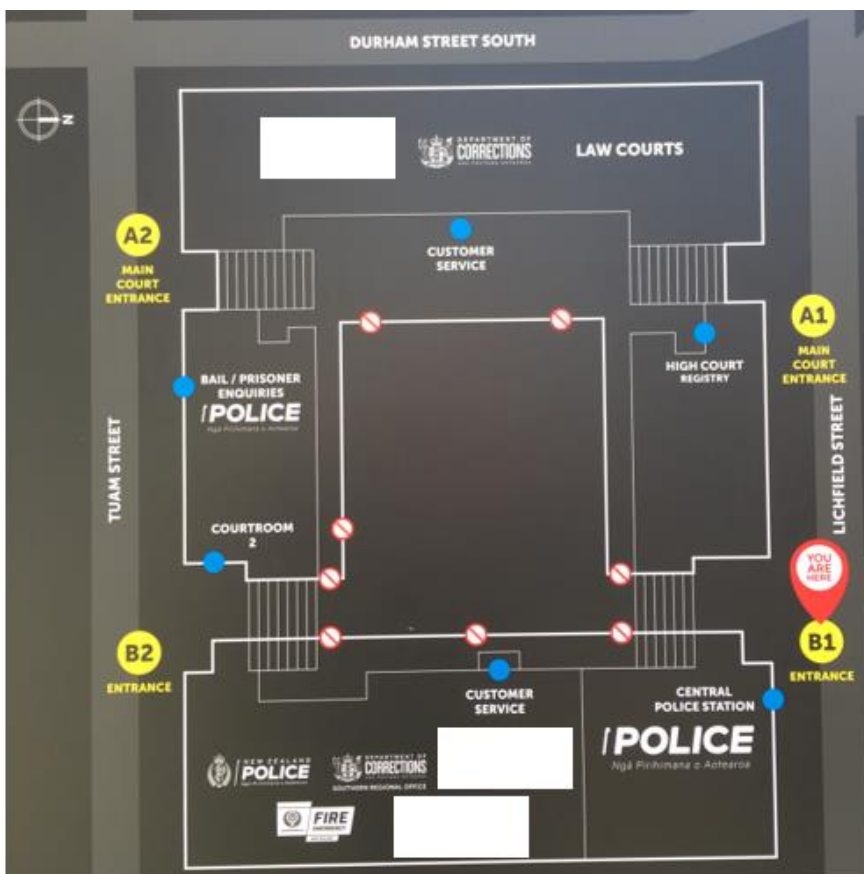
NZ Silver Fern



Draw any other flags here

Stop at the Justice and Emergency Services Precinct.

9. What is missing from this map? Draw or write your answer.
Circle the compass and point to north.



10. Sort each of the 6 services at the Justice and Emergency Services Precinct into the correct group - write J for justice or ES for emergency service.




MINISTRY OF
JUSTICE
Tāhū o te Ture



DEPARTMENT OF
CORRECTIONS
ARA POUTAMA AOTEAROA

11. Draw what you think the spikes on top of the signs are meant to stop?



12. There are 3 red flags along the side of the road.



What does this Māori word mean in English?

Walk to the end of the street and stop at the three kowhai trees.



13. Look up to your left at the end of the building. Take a photo of the New Zealand Coat of Arms. What do you see on it?
Draw or write your answer.

14. Tick any of the signs and symbols you see before you cross the road.



15. Follow the map and walk alongside Durham Street South to the little path that cuts through the park. This is Friendship Corner. There are three trees planted on the right by representatives from Christchurch's Sister Cities. Have your teacher read each plaque to you. What countries are our Sister Cities in?


Which tree is the oldest?

Follow the path to where it joins Oxford Terrace. Find the round Sister Cities plaque in the path. Take a photo of the plaque.

16. How many sister cities does Christchurch have? _____


Walk to the large stone archway.

17. What is the archway called and what does it help us to remember? Draw a quick outline of the archway.




What plant is inside each arch for remembrance?

18. Take a photo of the woven mat of welcome (whāriki) on the ground near the archway. Draw the flowers you can see in the mat? Why do you think it has these flowers?



Stop here to feed the eels.



21. Tuna is the Māori word for eel. Draw a picture of the tuna.



Walk along the path beside the Avon River. Cross Hereford Street. Stop at the Mill Island water wheel.


The water wheel symbolises the historic use of the island and is not a copy of the original wheel. Your teacher will read the information board to you.

19. What was the island used for 160 years ago? Tick one.



What do you think the water wheel did?


What would the flour be used for? Tick your answers.



Walk down the gravel path to the Avon River. Take a photo of the whāriki on the grass.

20. What colours have been used? _____

Draw the shapes that are used to make the pattern.



22. Who is the statue of? _____


Look at the plaques on the ground in front of the statue. Find New Zealand.

23. What continent is also shown in the picture, below New Zealand?

Walk towards the red phone box to the “Home of the First Peoples” information board. Your teacher will read the words to you.

24. What was here 700 years ago? _____

Draw a quick picture of some of the resources that were here for the Māori people to use.

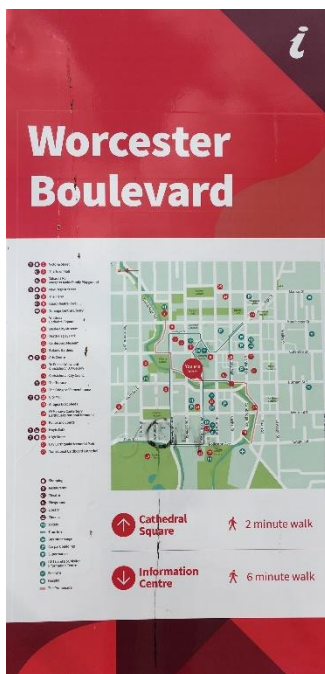


Look at the whāriki on Worcester Boulevard. Take a photo of the mat.

25. Draw the symbol that has been used to represent the cathedral. What colour has been added to this mat.



Stop at this sign.



Find the compass and have the class point to the north. What direction will you need to walk in to get to the cathedral?

Walk to Cathedral Square. Find the four trees and plaques in front of this building and fence.



26. What does each tree and plaque represent?

27. Name each ship. _____


Get some newsprint and a crayon from your teacher and take some rubbings of the plaques.

28. Find this statue.



Who is this man and why is he important?

29. Turn and look at the cathedral. What caused the damage to it?



Look at the buildings around the cathedral. Take a photo of them. Draw a quick picture of some of the buildings. How are they different to the cathedral?

A large empty rectangular box for drawing.

Christchurch City Map

